

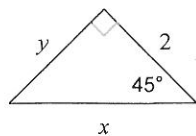
# Homework 64

© 2012 Kuta Software LLC. All rights reserved.

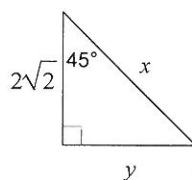
Date \_\_\_\_\_ Period \_\_\_\_\_

**Find the missing side lengths. Leave your answers as radicals in simplest form.**

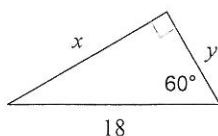
1)



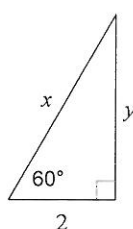
2)



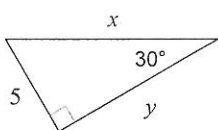
3)



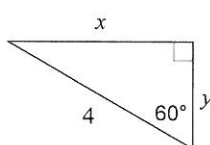
4)



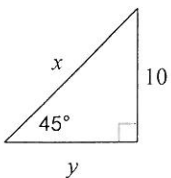
5)



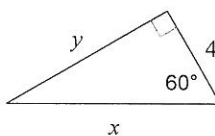
6)



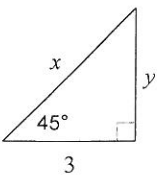
7)



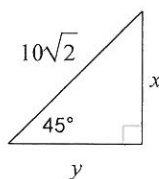
8)



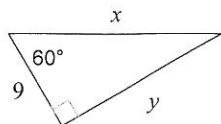
9)



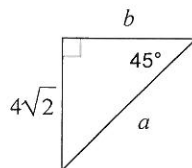
10)



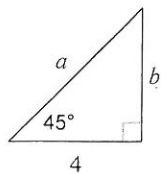
11)



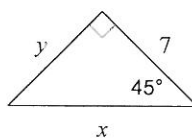
12)



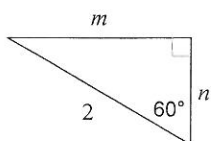
13)



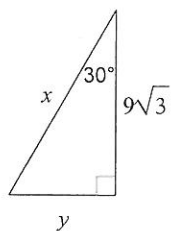
14)



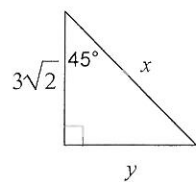
15)



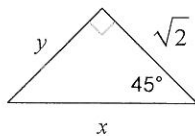
16)



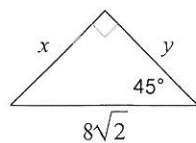
17)



18)



19)



20)

